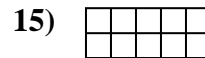

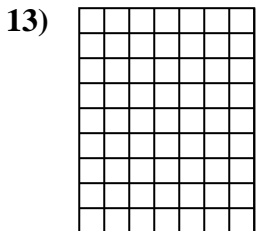

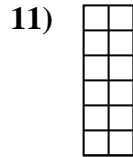
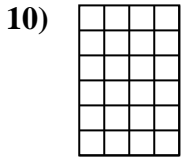

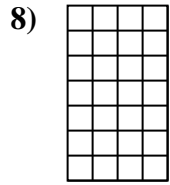
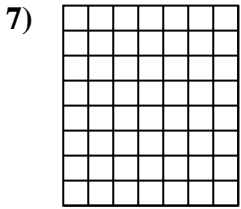
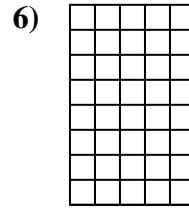
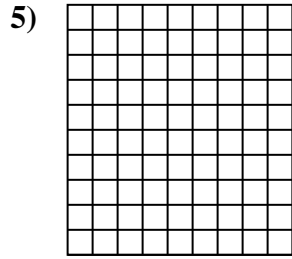
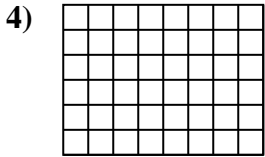
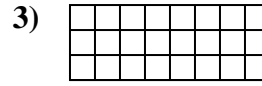
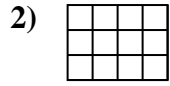
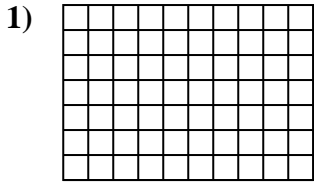




Determine the area. Each $\square = 1$ square unit (u^2).

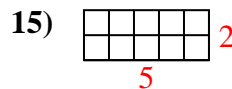
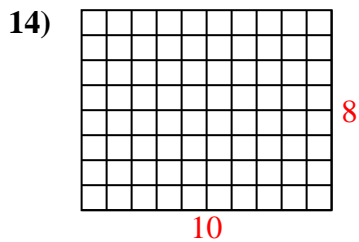
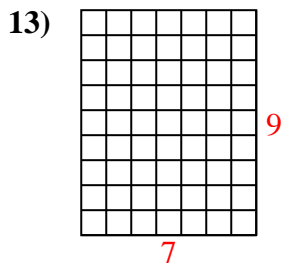
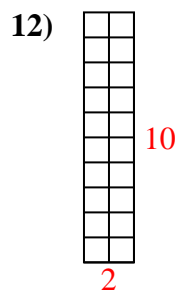
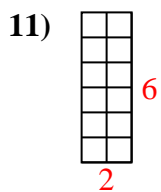
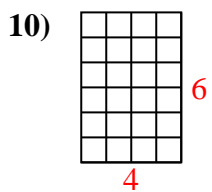
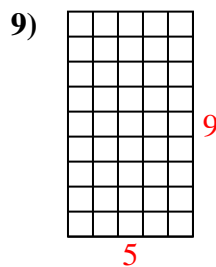
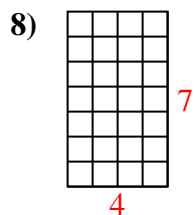
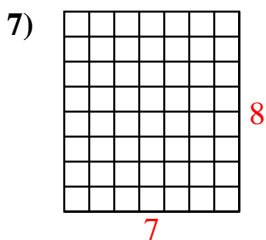
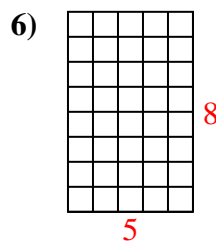
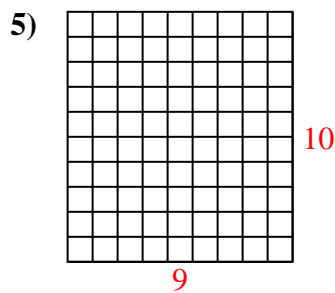
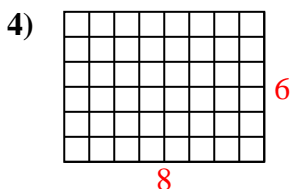
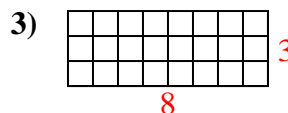
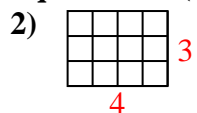
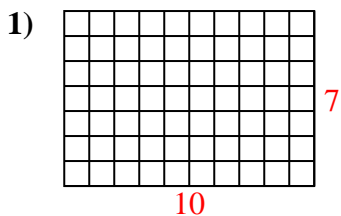


Answers

- 1. _____
- 2. _____
- 3. _____
- 4. _____
- 5. _____
- 6. _____
- 7. _____
- 8. _____
- 9. _____
- 10. _____
- 11. _____
- 12. _____
- 13. _____
- 14. _____
- 15. _____



Determine the area. Each $\square = 1$ square unit (u^2).



Answers

1. 70 u^2

2. 12 u^2

3. 24 u^2

4. 48 u^2

5. 90 u^2

6. 40 u^2

7. 56 u^2

8. 28 u^2

9. 45 u^2

10. 24 u^2

11. 12 u^2

12. 20 u^2

13. 63 u^2

14. 80 u^2

15. 10 u^2